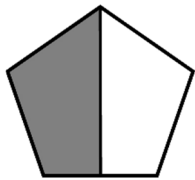
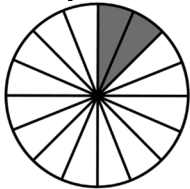



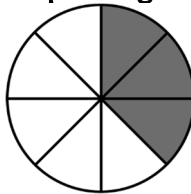
Numération CM1 - Les fractions 1

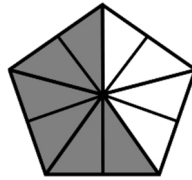
1 - Sur cette feuille, indique la fraction correspondant à la partie grisée.




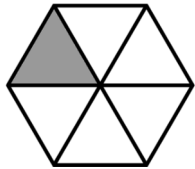








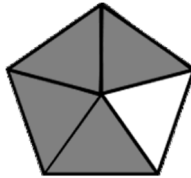





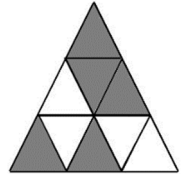








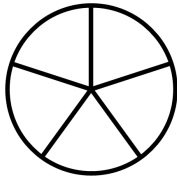




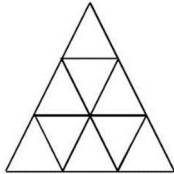
2 - Sur cette feuille, colorie la fraction demandée.




$$\frac{3}{8}$$



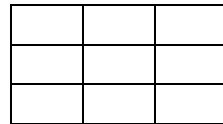
$$\frac{2}{5}$$




$$\frac{4}{9}$$



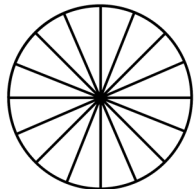
$$\frac{2}{3}$$



$$\frac{8}{9}$$



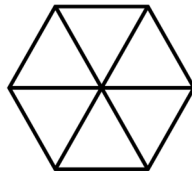
$$\frac{1}{4}$$



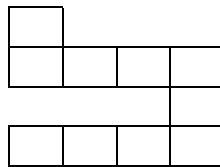
$$\frac{11}{16}$$



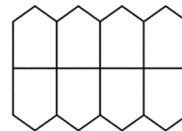
$$\frac{3}{3}$$




$$\frac{4}{6}$$



$$\frac{7}{10}$$



$$\frac{1}{8}$$



$$\frac{2}{6}$$